

Mental Mathematics - Set D - Test 1


First Name :	
Last Name :	
Teacher :	Class :

Total

P		8 2	<input type="checkbox"/>
----------	--	-----	--------------------------

Marked by _____

	Answer		Mark
1	g kg tonne		<input type="checkbox"/>

	Answer		Mark
15			<input type="checkbox"/>

2			<input type="checkbox"/>
---	--	--	--------------------------


3			<input type="checkbox"/>
---	--	--	--------------------------

4		256 135	<input type="checkbox"/>
---	--	---------	--------------------------

5			<input type="checkbox"/>
---	--	--	--------------------------

16		27941	<input type="checkbox"/>
----	--	-------	--------------------------

6		372	<input type="checkbox"/>
---	--	-----	--------------------------

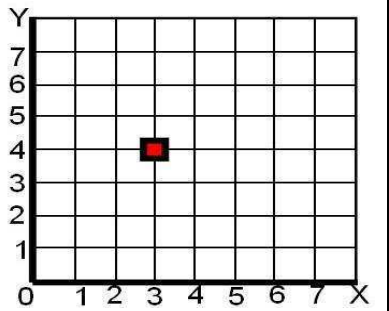
17			<input type="checkbox"/>
----	--	--	--------------------------

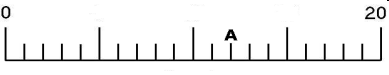
7			<input type="checkbox"/>
---	--	--	--------------------------

8		21	<input type="checkbox"/>
---	--	----	--------------------------


18	<table style="margin: auto;"> <tr> <td style="padding: 5px;">Certain</td> <td style="padding: 5px;">Likely</td> </tr> <tr> <td style="padding: 5px;">Unlikely</td> <td style="padding: 5px;">Impossible</td> </tr> </table>	Certain	Likely	Unlikely	Impossible		<input type="checkbox"/>
Certain	Likely						
Unlikely	Impossible						

9		1 3 5 8	<input type="checkbox"/>
---	--	---------	--------------------------

10	 <p style="text-align: center;">(,)</p>		<input type="checkbox"/>
----	--	--	--------------------------

19			<input type="checkbox"/>
----	--	--	--------------------------

11		90°	<input type="checkbox"/>
----	--	-----	--------------------------

20			<input type="checkbox"/>
----	--	--	--------------------------

12			<input type="checkbox"/>
----	--	--	--------------------------

13		NW	<input type="checkbox"/>
----	--	----	--------------------------

14			<input type="checkbox"/>
----	--	--	--------------------------

Mental Mathematics - Set D - Test 1

I am going to start with the practice question. I will then ask you 20 questions for the test. You will see a box on your answer sheet to write your answer. For some questions there will be some information on the sheet to help you.

I will read each question twice, and then you will have some time to work out the answer and write it down.

Here is the Practice Question. You will have 5 seconds to complete this question.

P	What is eight multiplied by two
----------	--

Put your pens or pencils down. The answer is 16. Are there any questions?

Now we are ready to start the test. For the first group of questions you will have 5 seconds to work out each answer and write it down.

Answer Question Question
 Number

g	1	Circle the unit you think we would measure the weight of an orange.
52066	2	Write fifty two thousand and sixty six in figures.
4	3	What is five plus three take away four?
121	4	What is two hundred and fifty-six subtract one hundred and thirty-five?
400	5	Write three hundred and seventy-two to the nearest hundred?

For the next group of questions you will have 10 seconds to work out each answer and write it down.

Answer Question Question
 Number

7000	6	What is the value of the seven in the number shown on your answer sheet?
7/10	7	In a group of ten friends, seven play football and three do not. What fraction of the friends plays football?
5	8	I think of a number. When I multiply by four then add one, the result is twenty-one. What is the number?
7	9	What is the range of the numbers shown?
(3, 4)	10	What is the coordinate shown on the grid?
Acute	11	What is the name of the angle that is less than 90 degrees?
Pentagon	12	What is the name of a five sided shape?
South East (allow SE)	13	Lucy travels North-West to go to school. Which way does she travel to return home?

Mental Mathematics - Set D - Test 1

For the next group of questions you will have 15 seconds to work out each answer and write it down.

Answer	Question Number	Question
8	14	How many vertices does a cuboid have?
1.30pm	15	William is having his Lunch and looks at the clock. What time does it show? Include AM or PM
1,2,3,6	16	Write all the factors of six?
Bottom Right	17	Circle the net that folds up into a cube?
Unlikely	18	Circle the word that describes this event. I throw two dice once and get a double six?
12	19	What number is represented by the letter A on the ruler?
20	20	What is the perimeter of the shape shown?

'Put your pens down. The test is over.'