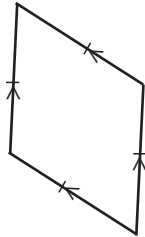


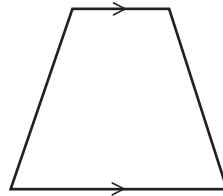
Identifying Quadrilateral

Write the name below each quadrilateral.

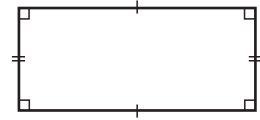
1)



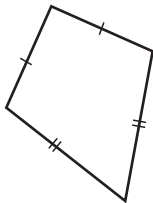
2)



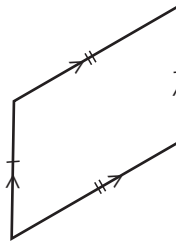
3)



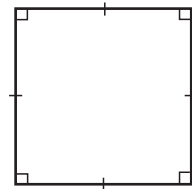
4)



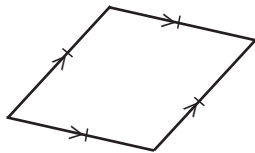
5)



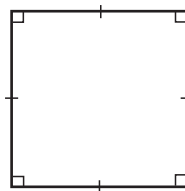
6)



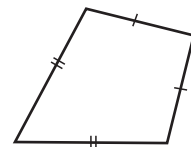
7)



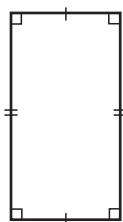
8)



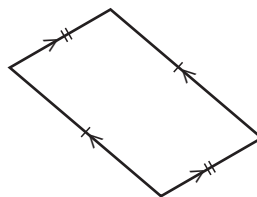
9)



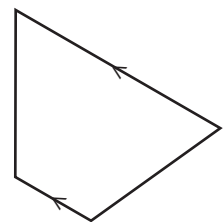
10)



11)



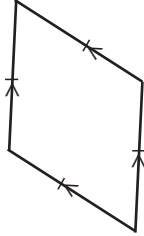
12)



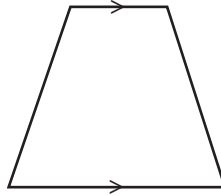
Answer Key

Write the name below each quadrilateral.

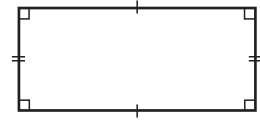
1)

**Rhombus**

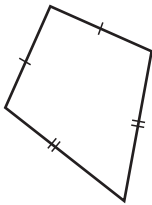
2)

**Trapezoid**

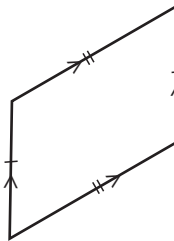
3)

**Rectangle**

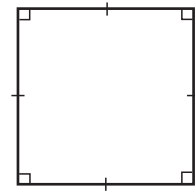
4)

**Kite**

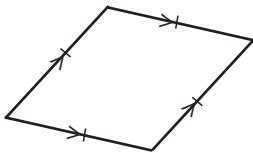
5)

**Parallelogram**

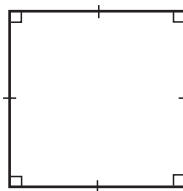
6)

**Square**

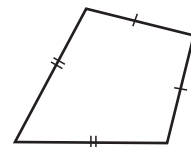
7)

**Rhombus**

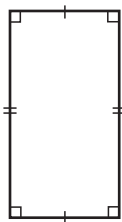
8)

**Square**

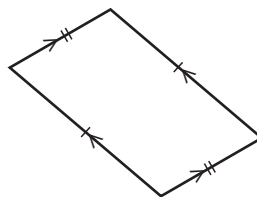
9)

**Kite**

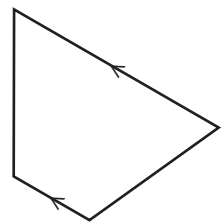
10)

**Rectangle**

11)

**Parallelogram**

12)

**Trapezoid**