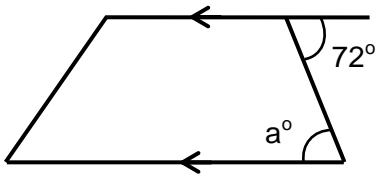


Angles on Parallel Lines (B)

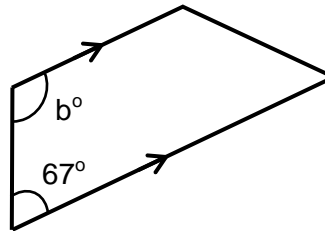
**NOT TO SCALE**

For each question calculate the missing angle and give a reason for your answer.

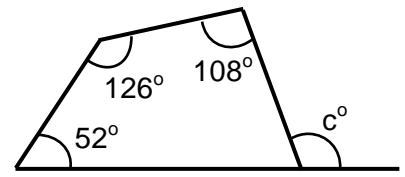
1)

Reason: _____

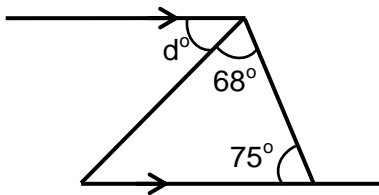
2)

Reason: _____

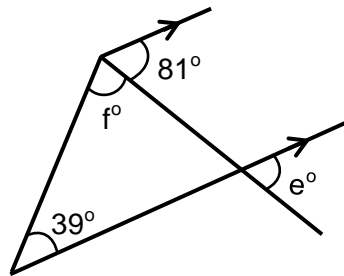
3)

Reason: _____

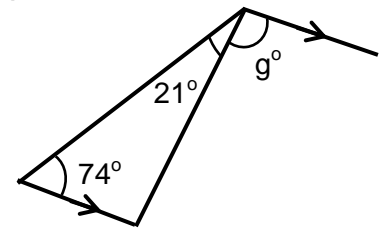
4)

Reason: _____

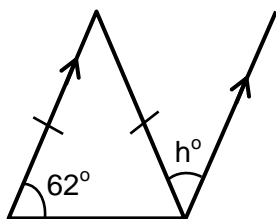
5)

Reason: _____

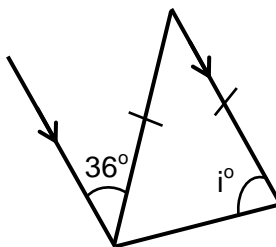
6)

Reason: _____

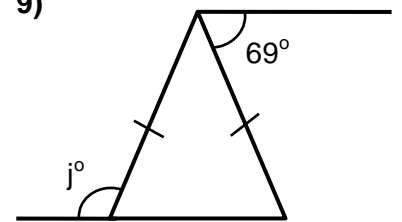
7)

Reason: _____

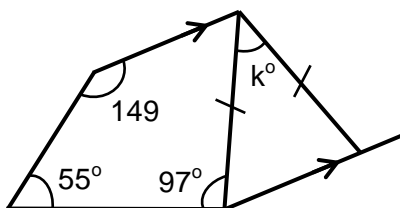
8)

Reason: _____

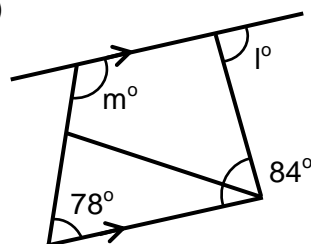
9)

Reason: _____

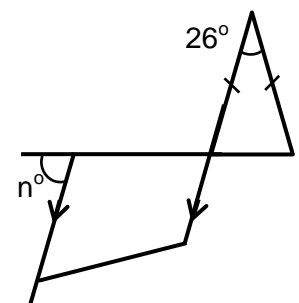
10)

Reason: _____

11)

Reason: _____

12)

Reason: _____

