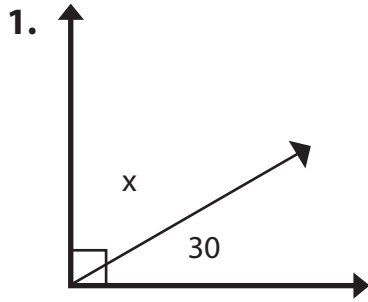
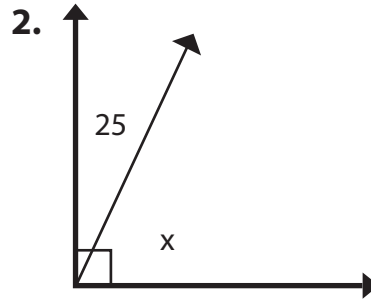


Complementary Angles

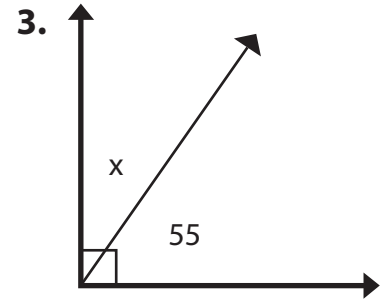
Solve for angle x .



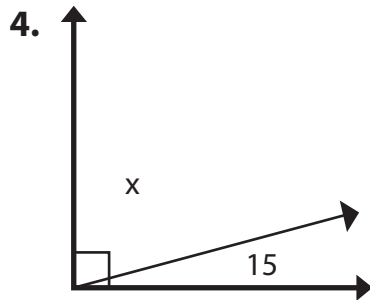
$$x = \underline{60}$$
$$(90 - 30 = 60)$$



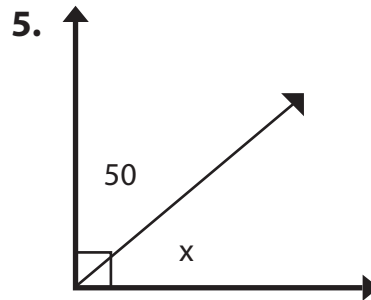
$$x = \underline{\hspace{2cm}}$$



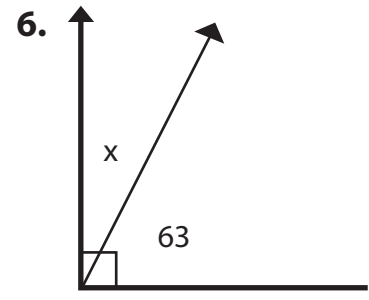
$$x = \underline{\hspace{2cm}}$$



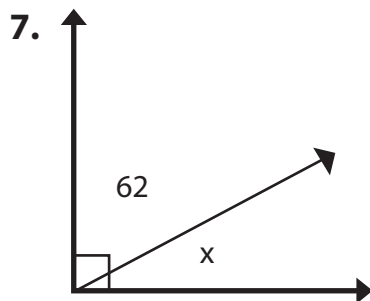
$$x = \underline{\hspace{2cm}}$$



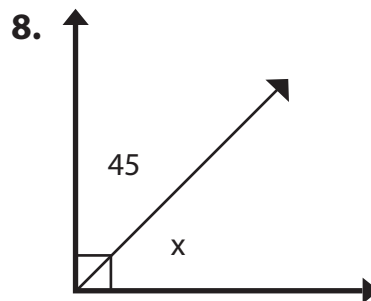
$$x = \underline{\hspace{2cm}}$$



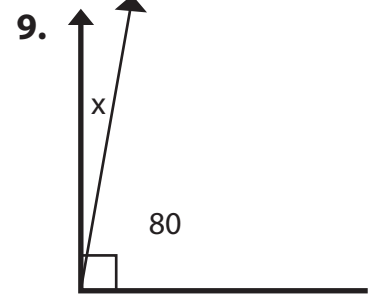
$$x = \underline{\hspace{2cm}}$$



$$x = \underline{\hspace{2cm}}$$



$$x = \underline{\hspace{2cm}}$$



$$x = \underline{\hspace{2cm}}$$