


Name: _____

Measuring Angles

Use your protractor to measure each angle.


1.  This angle is _____ degrees.

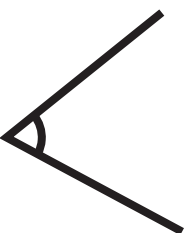
2.  This angle is _____ degrees.


3.  This angle is _____ degrees.


4.  This angle is _____ degrees.


5.  This angle is _____ degrees.

6.  This angle is _____ degrees.

7.  This angle is _____ degrees.

8.  This angle is _____ degrees.

9.  This angle is _____ degrees.

10.  This angle is _____ degrees.