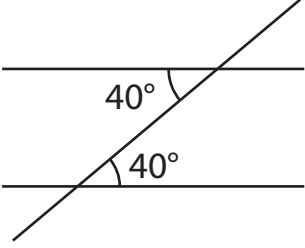
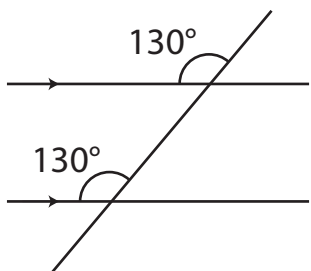
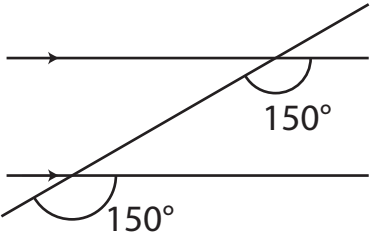
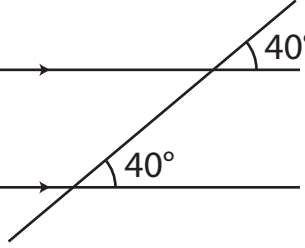
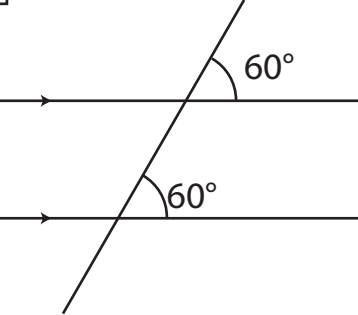
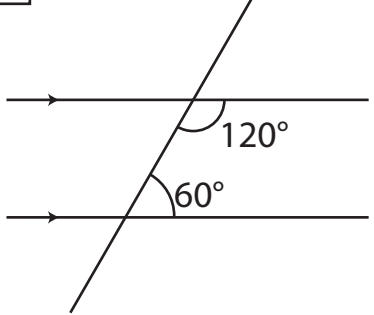
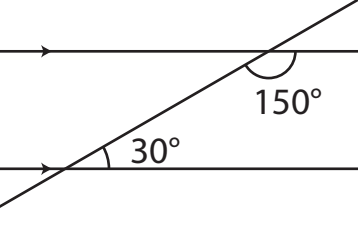
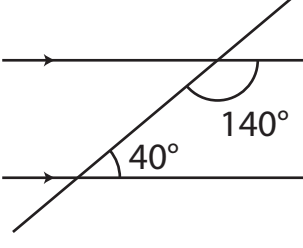
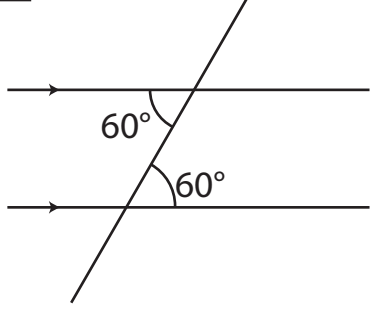
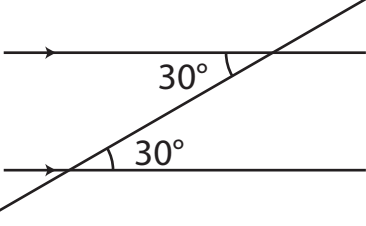
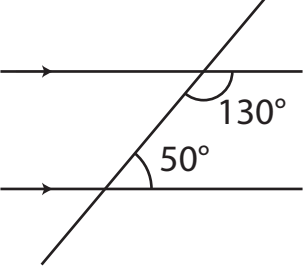
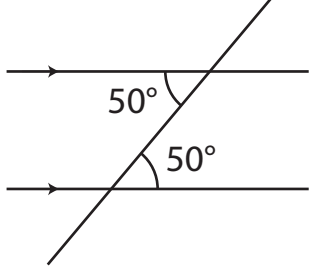


ex S2.4 Parallel lines and angles

Collect the cards in sets of **three**.

Each set has a card with corresponding angles, a card with alternate angles and a card with allied angles.

<p>A</p> 	<p>B</p> 	<p>C</p> 
<p>D</p> 	<p>E</p> 	<p>F</p> 
<p>G</p> 	<p>H</p> 	<p>I</p> 
<p>J</p> 	<p>K</p> 	<p>L</p> 
<p>Corresponding</p>	<p>Allied</p>	<p>Alternate</p>